

Name : _____

Score : _____

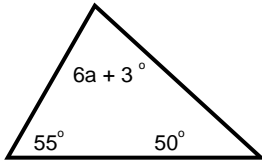
Teacher : _____

Date : _____

Triangle Angle Sum

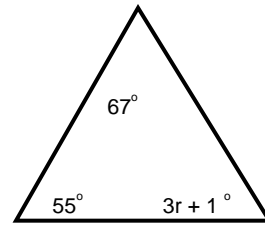
Solve for the given variable.

1)



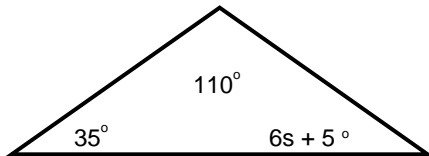
$a = \underline{\hspace{2cm}}$

5)



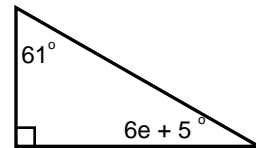
$r = \underline{\hspace{2cm}}$

2)



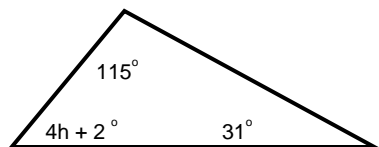
$s = \underline{\hspace{2cm}}$

6)



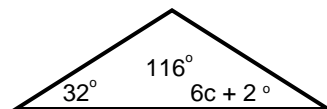
$e = \underline{\hspace{2cm}}$

3)



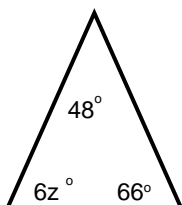
$h = \underline{\hspace{2cm}}$

7)



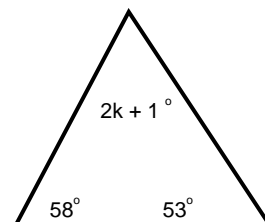
$c = \underline{\hspace{2cm}}$

4)



$z = \underline{\hspace{2cm}}$

8)



$k = \underline{\hspace{2cm}}$



Name : _____

Score : _____

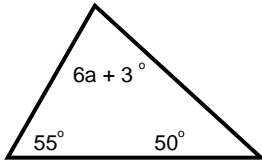
Teacher : _____

Date : _____

Triangle Angle Sum

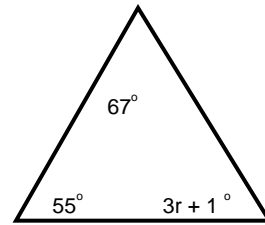
Solve for the given variable.

1)



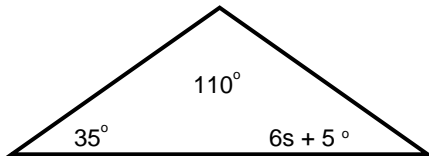
$$a = 12$$

5)



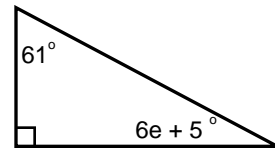
$$r = 19$$

2)



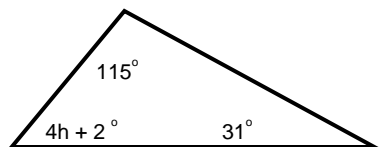
$$s = 5$$

6)



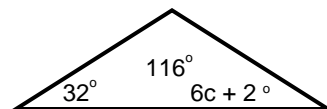
$$e = 4$$

3)



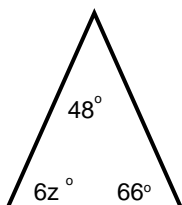
$$h = 8$$

7)



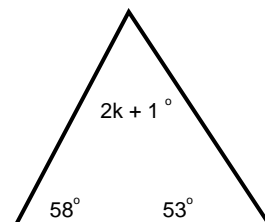
$$c = 5$$

4)



$$z = 11$$

8)



$$k = 34$$

